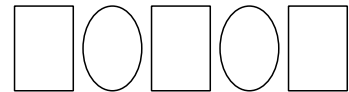
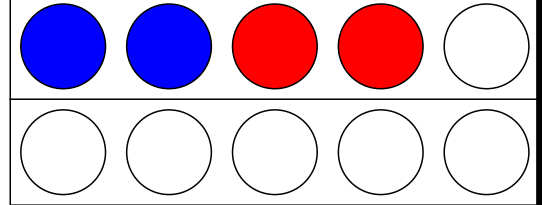
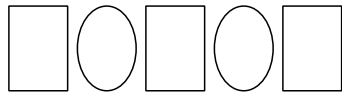
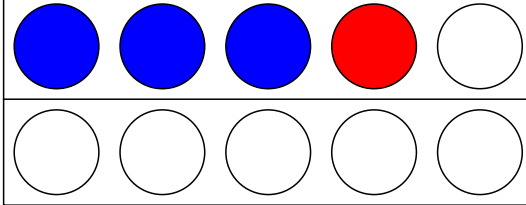
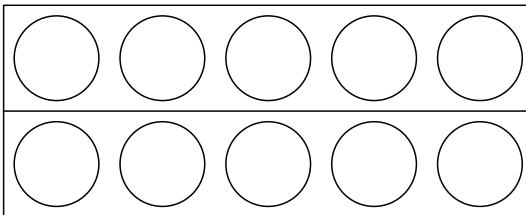


Name: _____

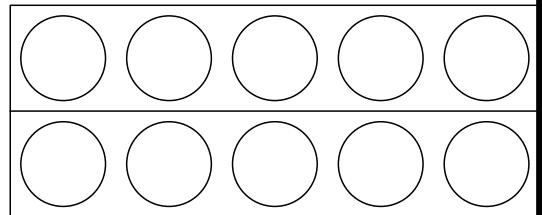
1



2



$$1 + 3 = \square$$



$$2 + 1 = \square$$

3

Schreibe die 4 auf

--	--	--	--	--	--	--	--	--

4

$$1 + 3 = \underline{\quad}$$

$$1 + 4 = \underline{\quad}$$

$$2 + 1 = \underline{\quad}$$

$$4 + 1 = \underline{\quad}$$

$$1 + 1 = \underline{\quad}$$

$$3 + 2 = \underline{\quad}$$